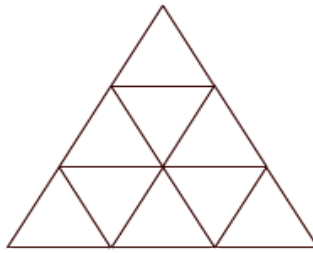


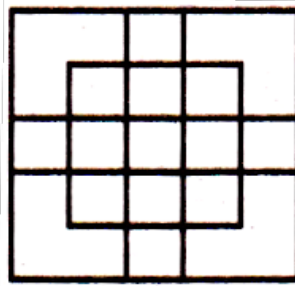
REASONING

1) Find the number of triangles in the given figure?



- a) 11 b) 13 c) 14 d) 12

2) How many squares are in the given picture?



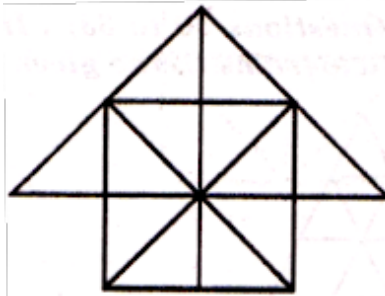
- a) 23 b) 20 c) 25 d) 27

3) How many of triangles in the given figure?



- a) 8 b) 11 c) 10 d) 9

4) Find the number of triangles in the given figure?



- a) 6 squares, 28 triangles b) 7 squares, 27 triangles
c) 8 squares, 30 triangles d) 6 squares, 30 triangles

The Walnut

Phone: +91 99950 59590

Organisation for Advanced Training

Webpage: www.walnuttraining.org

ANSWERS:

- 1) b (13)
- 2) d (27)
- 3) c (10)
- 4) a (6 squares, 28 triangles)

The Walnut